

1. Work out $103.5 + 65.27$
(1 mark)2. Work out $73.4 - 26.92$
(1 mark)3. Work out 2.1×1.6
(2 mark)4. Work out $\text{£}13.71 \div 3$
(2 mark)

5. Round 2.8261 to the nearest 2 dp

.....
(1 mark)6. Work out -4×-9
(1 mark)7. $\frac{3}{4}$ of x is 15, what is x ?.....
(1 mark)

8. Find 30% of 145

.....
(1 mark)9. Convert $\frac{3}{8}$ to a decimal.....
(1 mark)10. Calculate $5^3 - 10^2$
(2 marks)11. Write down the n th term $-1, 4, 9, 14, 19$
(2 marks)

12. Simplify

 $\frac{14}{42}$
(1 mark)

Name : Class..... Score.....

13. Simplify $5x + 8x^2 - 3x - 5x^2$

.....
(2 mark)

14. Work out $5m \times \square = 35mn^2$

.....
(1 mark)

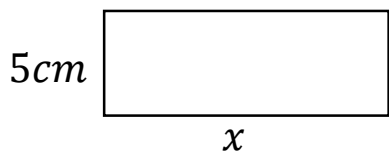
15. Expand and simplify
 $4(6a + 1) + 2(6a - 3)$

.....
(2 marks)

16. What is the HCF of 30 and 45

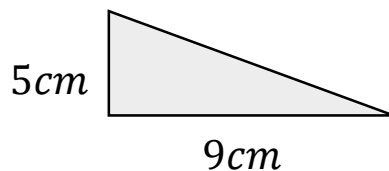
.....
(2 marks)

17. Calculate x



Perimeter = 24cm
(1 mark)

18. Calculate the area



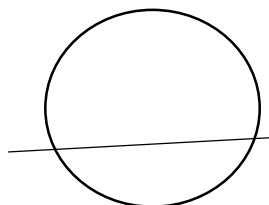
.....
(2 mark)

19. Name this shape




.....
(1 mark)

20. Name this part of a circle



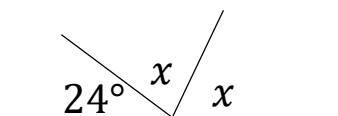
.....
(1 mark)

21. Draw all the lines of symmetry



.....
(1 mark)

22. Calculate x



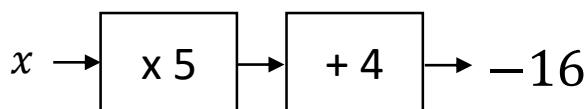
$x = \dots\dots\dots$
(2 mark)

23. Workout

$$2 \times 6^2 - \sqrt{4}$$

.....
(2 mark)

24. Solve



$x = \dots\dots\dots$
(1 mark)